
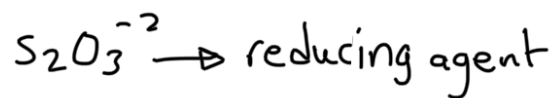
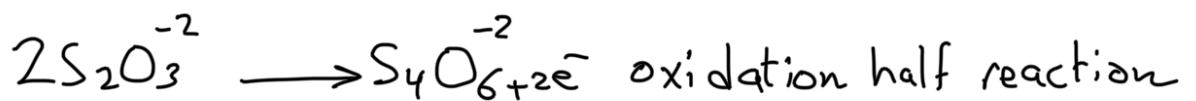


## Test

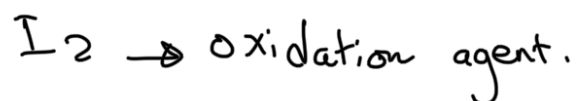
In the following electrochemical reaction,



- Specify the oxidation and reduction half reactions.
- oxidizing and reducing agents.



O.N  $\uparrow$  increased



O.N  $\downarrow$  decreased.